

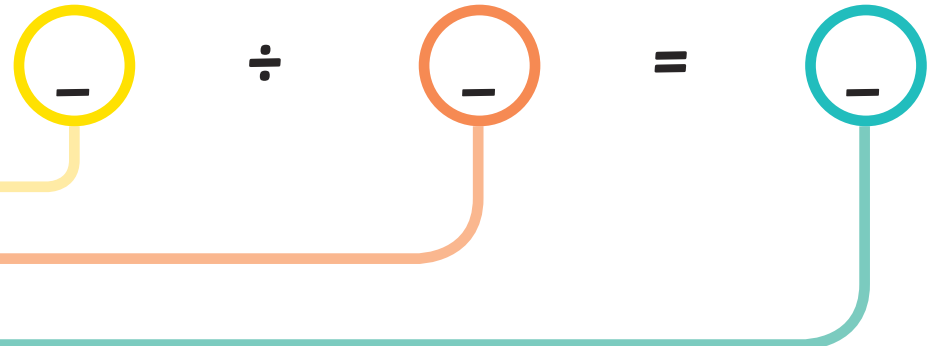
Sharing Cookies

1. Cut out the cookies and share them between 2 friends.

How many cookies are there?

How many friends are there?

How many cookies does each friend get?

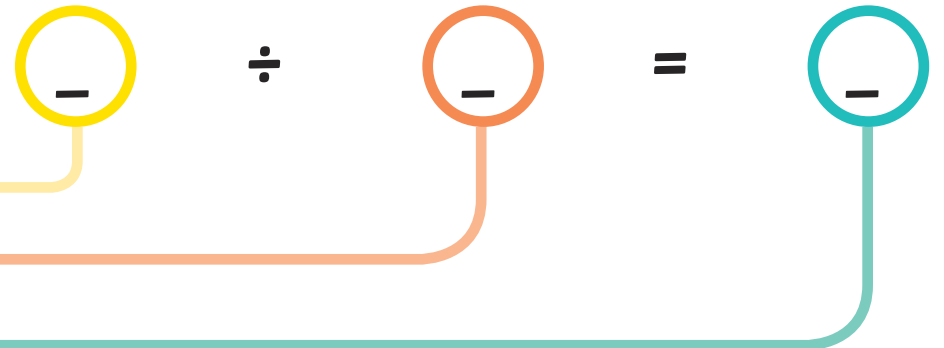


2. Cut out the cookies and share them between 4 friends.

How many cookies are there?

How many friends are there?

How many cookies does each friend get?

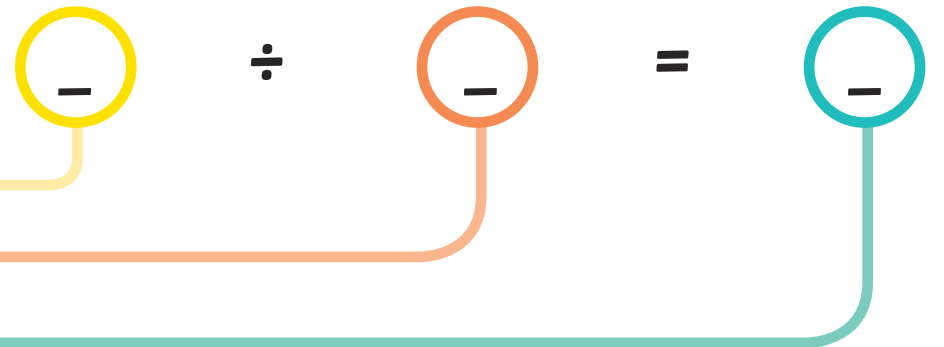


3. Cut out the cookies and share them between 6 friends.

How many cookies are there?

How many friends are there?

How many cookies does each friend get?



4. Can you share the cookies another way?



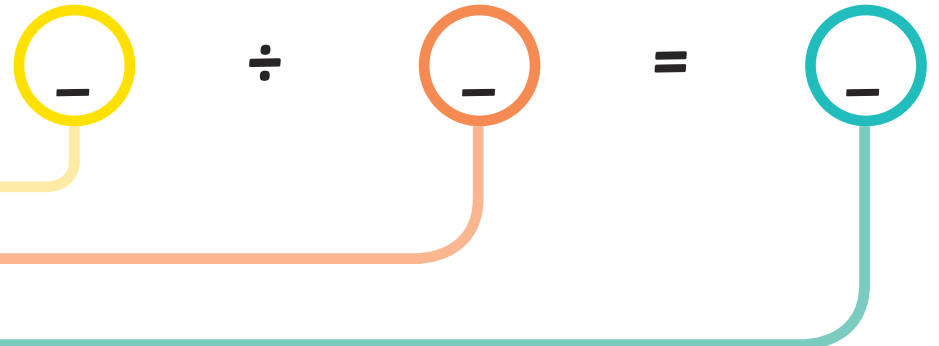
Sharing Cookies

1. Cut out the cookies and share them between 2 friends.

How many cookies are there?

How many friends are there?

How many cookies does each friend get?

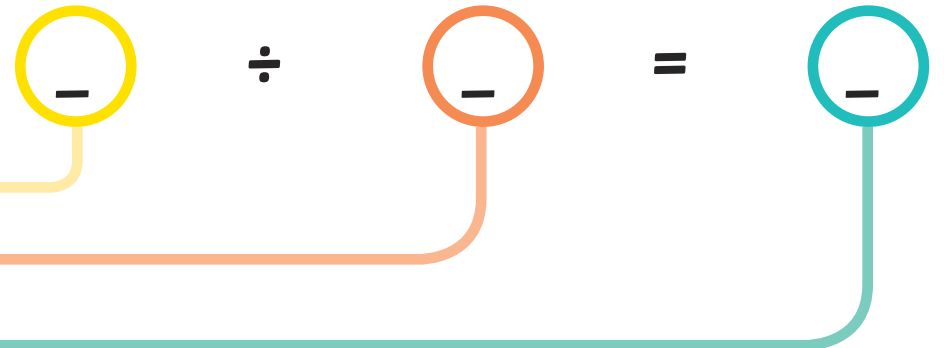


2. Cut out the cookies and share them between 4 friends.

How many cookies are there?

How many friends are there?

How many cookies does each friend get?

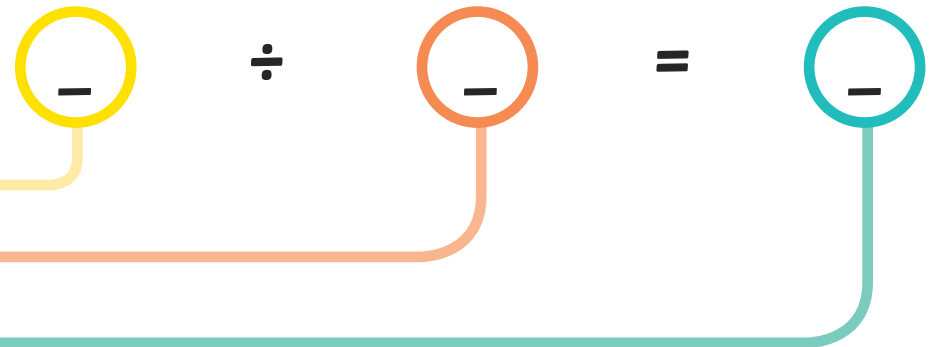


3. Cut out the cookies and share them between 6 friends.

How many cookies are there?


How many friends are there?

How many cookies does each friend get?



4. Can you share the cookies another way?





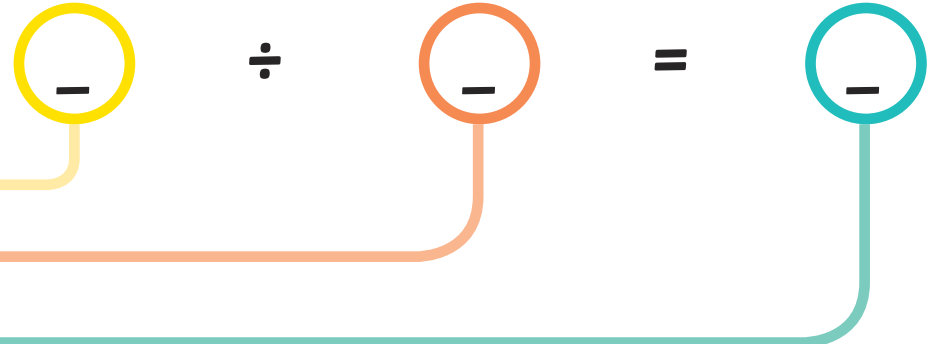
Sharing Cookies

1. Cut out the cookies and share them between 2 friends.

How many cookies are there?

How many friends are there?

How many cookies does each friend get?

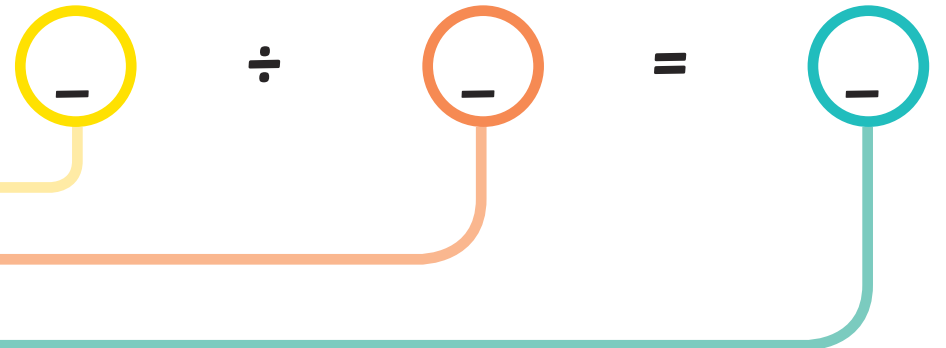


2. Cut out the cookies and share them between 4 friends.

How many cookies are there?

How many friends are there?

How many cookies does each friend get?

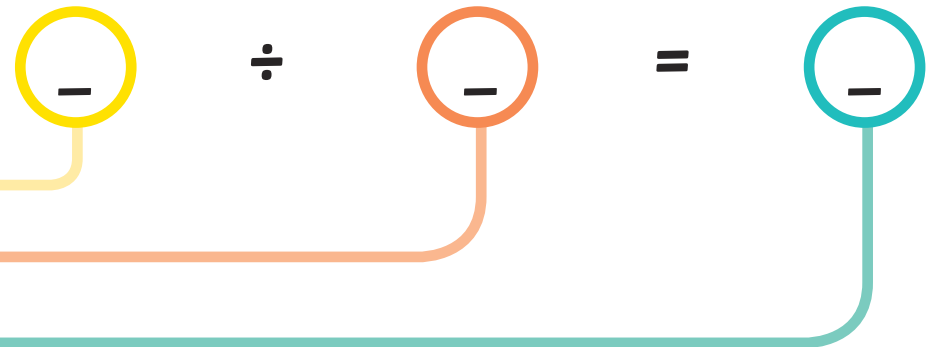


3. Cut out the cookies and share them between 6 friends.

How many cookies are there?


How many friends are there?

How many cookies does each friend get?



4. Can you share the cookies another way?





Answers

1. Cut out the cookies and share them between 2 friends.

How many cookies are there?

How many friends are there?

How many cookies does each friend get?

$$\frac{12}{-} \div \frac{2}{-} = \frac{6}{-}$$

2. Cut out the cookies and share them between 4 friends.

How many cookies are there?

How many friends are there?

How many cookies does each friend get?

$$\frac{12}{-} \div \frac{4}{-} = \frac{3}{-}$$

3. Cut out the cookies and share them between 6 friends.

How many cookies are there?

How many friends are there?

How many cookies does each friend get?

$$\frac{12}{-} \div \frac{6}{-} = \frac{2}{-}$$

4. Can you share the cookies another way?

Answers will vary

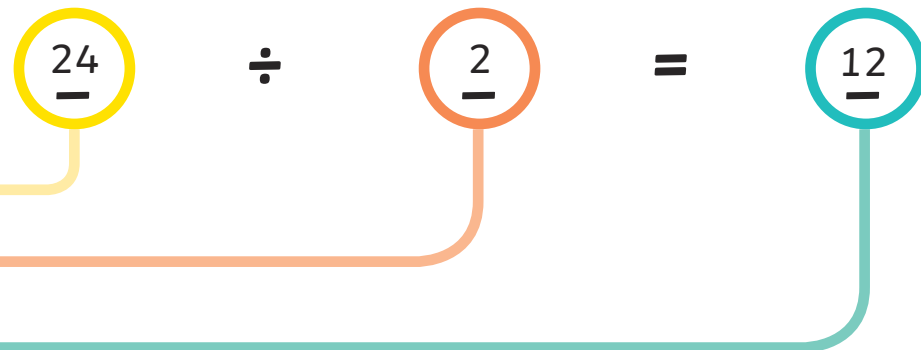
Answers

1. Cut out the cookies and share them between 2 friends.

How many cookies are there?

How many friends are there?

How many cookies does each friend get?

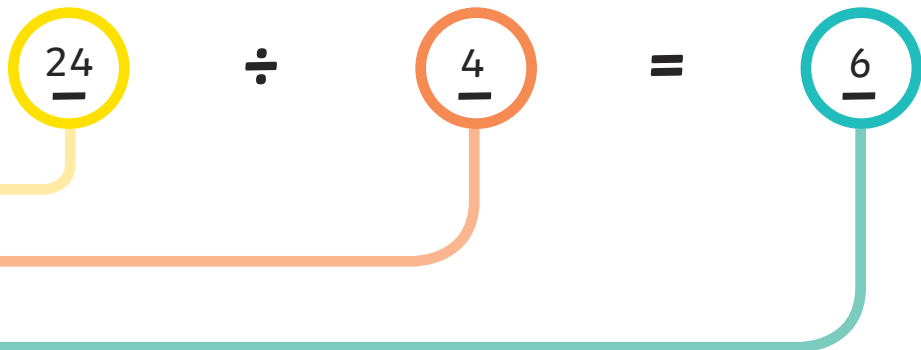


2. Cut out the cookies and share them between 4 friends.

How many cookies are there?

How many friends are there?

How many cookies does each friend get?

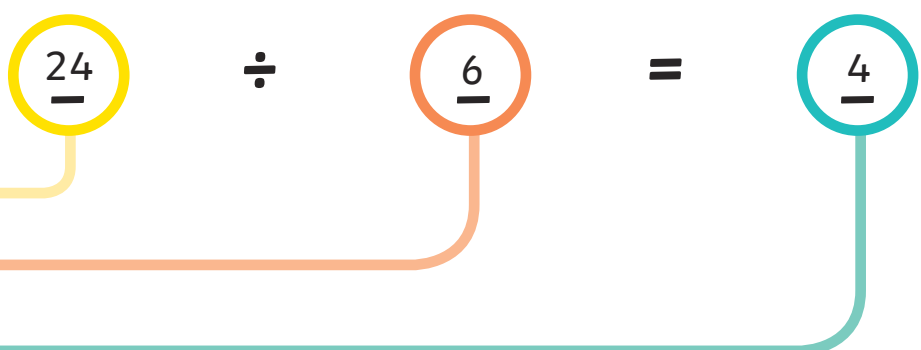


3. Cut out the cookies and share them between 6 friends.

How many cookies are there?

How many friends are there?

How many cookies does each friend get?



4. Can you share the cookies another way?

Answers will vary

Answers

1. Cut out the cookies and share them between 2 friends.

How many cookies are there? ●

How many friends are there? ●

How many cookies does each friend get? ●

$$\begin{array}{r} 48 \\ \hline \end{array} \div \begin{array}{r} 2 \\ \hline \end{array} = \begin{array}{r} 24 \\ \hline \end{array}$$

2. Cut out the cookies and share them between 4 friends.

How many cookies are there? ●

How many friends are there? ●

How many cookies does each friend get? ●

$$\begin{array}{r} 48 \\ \hline \end{array} \div \begin{array}{r} 4 \\ \hline \end{array} = \begin{array}{r} 12 \\ \hline \end{array}$$

3. Cut out the cookies and share them between 6 friends.

How many cookies are there? ●

How many friends are there? ●

How many cookies does each friend get? ●

$$\begin{array}{r} 48 \\ \hline \end{array} \div \begin{array}{r} 6 \\ \hline \end{array} = \begin{array}{r} 8 \\ \hline \end{array}$$

4. Can you share the cookies another way?

Answers will vary